

Ray Optics II

Last time, developed idea of ray optics
approximation to wave theory

Introduced paraxial approximation:

rays with $\theta \ll 1$

Will continue to use

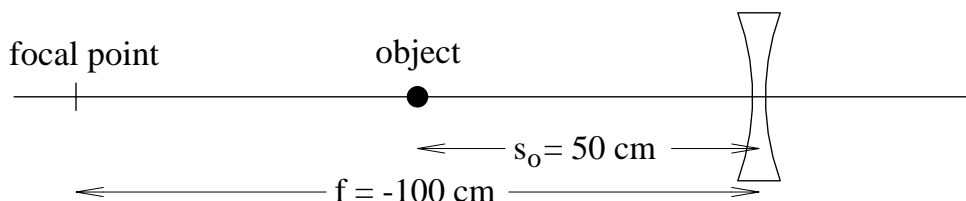
Started discussing imaging and lenses:

$$\text{Thin lens equation } \frac{1}{s_o} + \frac{1}{s_i} = \frac{1}{f}$$

Basic equation of paraxial optics

1

Example: Suppose a thin lens of focal length $f = -100$ cm is placed 50 cm in front of a small light bulb. Where will the image of the bulb be located?



Solution:

Real object upstream of lens, so $s_o = +50$ cm.

$$\text{Then } \frac{1}{s_i} = \frac{1}{f} - \frac{1}{s_o} = \frac{1}{(-100 \text{ cm})} - \frac{1}{50 \text{ cm}} = -0.03 \text{ cm}^{-1}$$

$$\text{So } s_i = -33.3 \text{ cm}$$

Negative, so image located 33.3 cm before lens

$$= 16.7 \text{ cm from object}$$

2

Today: continue with imaging

- Imaging extended objects
- Multiple lenses
- Mirrors
- Apertures

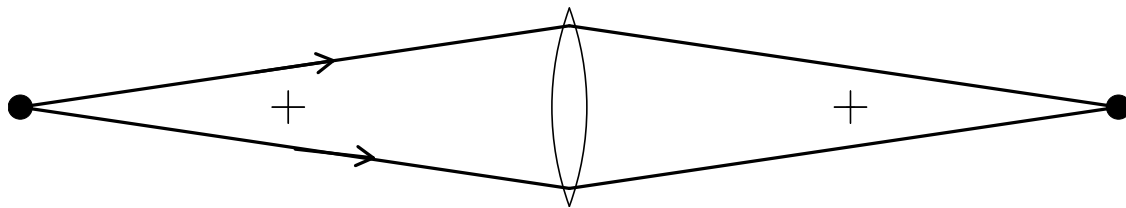
Next time:

Techniques for dealing with multi-lens systems

3

Finite Imaging (Hecht 5.2.3)

Before, all pictures showed point-to-point imaging

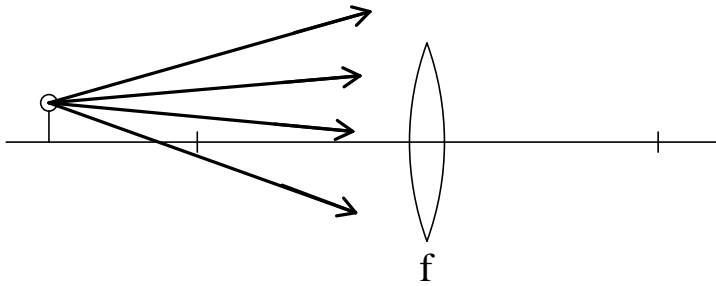


Points are on *optic axis*
= symmetry axis of lens

Finite object = collection of points
must deal with points that are off axis

4

Picture:



Construct image using *ray diagram*

Three simple rays:

- ray through lens center: undeviated
- ray through front focal point:
becomes horizontal
- horizontal ray: hits back focal point

5

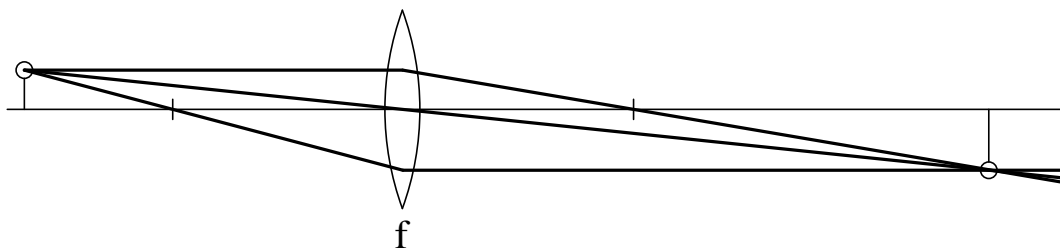


Image where rays intersect

Each point in object plane \rightarrow point in image plane

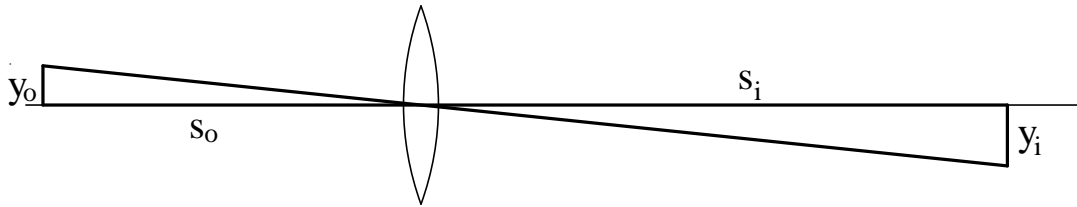
Here, image inverted:

- object height $y_o > 0$
- maps to image height $y_i < 0$

Define *magnification* $m = \frac{y_i}{y_o}$

6

Get magnification from diagram:



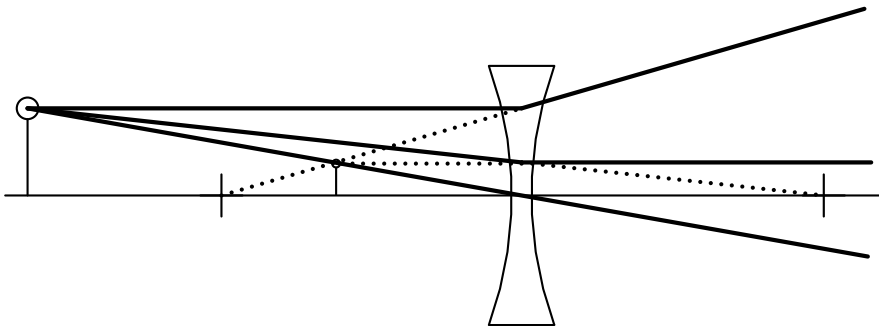
Triangles are similar, so $\frac{s_i}{y_i} = -\frac{s_o}{y_o}$

Then $m = \frac{y_i}{y_o} = -\frac{s_i}{s_o}$

with s_i determined by thin lens equation

7

For negative parameters, follow sign conventions:



Since $f < 0$, “front” and “back” focal points reversed

See that $s_i < 0$ and $m > 0$

Ray diagrams good tool for understanding

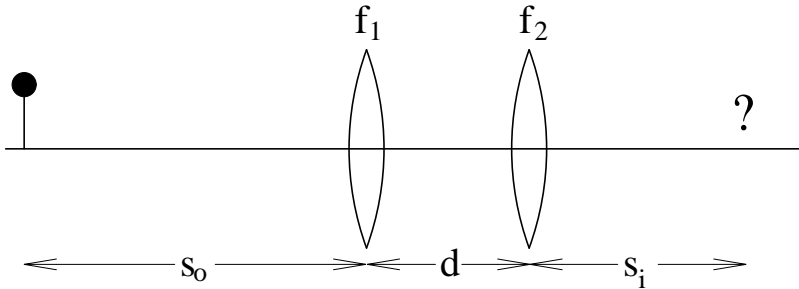
8

Lens systems

If more than one lens:

apply thin lens law in succession

Consider two lenses f_1, f_2 , separated by d



Find image distance s_i

9

First lens: image distance s_{i1}

$$\frac{1}{s_{i1}} = \frac{1}{f_1} - \frac{1}{s_o}$$

Second lens: object distance $s_{o2} = d - s_{i1}$

Then final image at s_i : $\frac{1}{s_i} = \frac{1}{f_2} - \frac{1}{s_{o2}}$

Combine, get

$$s_i = \frac{f_2 d s_o - f_1 f_2 d - f_1 f_2 s_o}{s_o d - s_o f_1 - s_o f_2 - d f_1 + f_1 f_2}$$

Not very enlightening

10

Simple case $d \rightarrow 0$:

$$s_{o2} = -s_{i1}$$

$$\text{Then } \frac{1}{s_i} = \frac{1}{f_2} + \frac{1}{s_{i1}} = \frac{1}{f_2} + \left(\frac{1}{f_1} - \frac{1}{s_o} \right)$$

So

$$\boxed{\frac{1}{s_o} + \frac{1}{s_i} = \frac{1}{f_1} + \frac{1}{f_2}}$$

like single lens with $\frac{1}{f_{\text{tot}}} = \frac{1}{f_1} + \frac{1}{f_2}$

11

Define $\frac{1}{f} = \text{power of lens}$

units: diopters ($\equiv \text{m}^{-1}$)

Lens powers add for adjacent lenses

Question: My eyeglass prescription is -4 diopters. What is the focal length of my lenses?

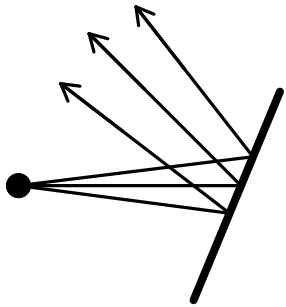
Next time, see better ways to treat lens systems

For now, move on to other elements

12

Mirrors (Hecht 5.4)

Flat mirrors just deflect rays

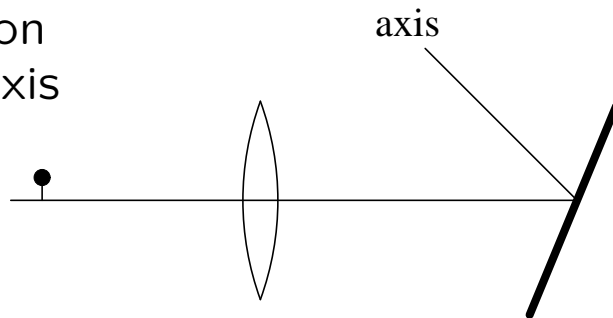


Makes ray tracing hard

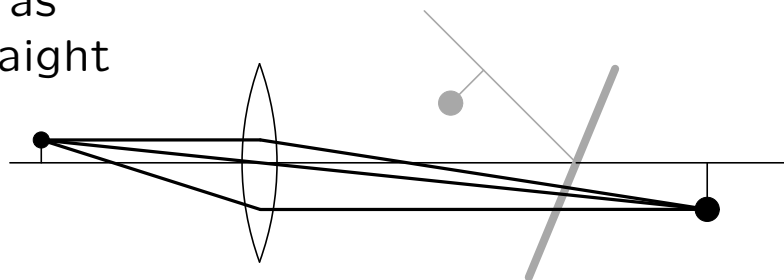
13

Best approach:

(1) Use law of reflection to find path of optic axis



(2) Trace rays as if axis were straight

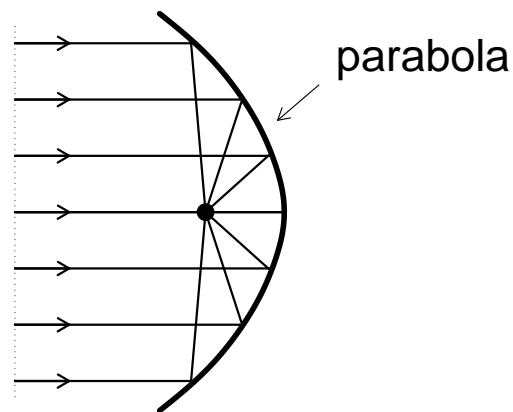


(3) Result correct relative to axis

14

Mirrors can be curved too
act like a lens

Get perfect imaging with aspheric mirror



Parabola = points equidistant from focus and line
so $S = \text{constant}$ for all rays

15

Aspheric surfaces still expensive:
spherical mirrors more common
work for paraxial rays

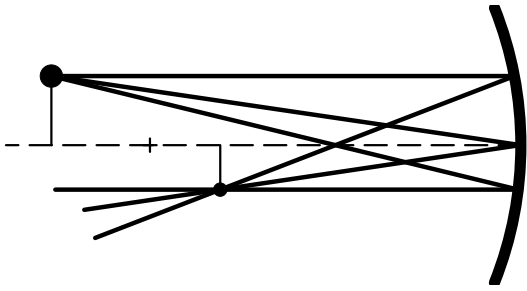
Analyze with law of reflection or Fermat's principle

Result:

$$\frac{1}{s_o} + \frac{1}{s_i} = -\frac{2}{R}$$

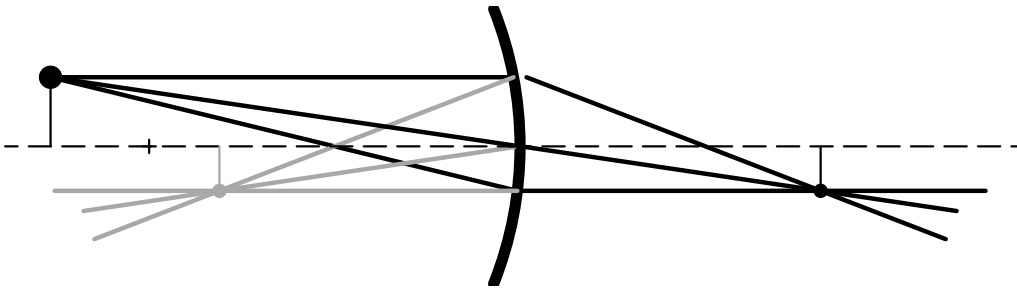
Just like thin lens: $f \rightarrow -R/2$

16



Here $R < 0$: like $f > 0$, get real image
 But optic axis also folded

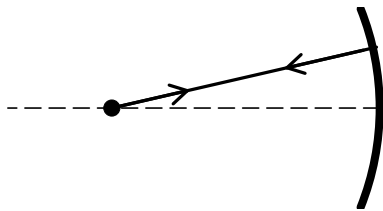
Lens equivalent:



17

Trick to remember factor of 2:

if object at center of curvature, so is image



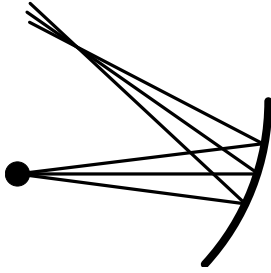
Then $s_o = s_i = -R$ (since $R < 0$ here)

and

$$\frac{1}{f} = \frac{1}{s_o} + \frac{1}{s_i} = -\frac{2}{R}$$

18

Question: Could you tilt a curved mirror and use it to both fold axis and focus rays?



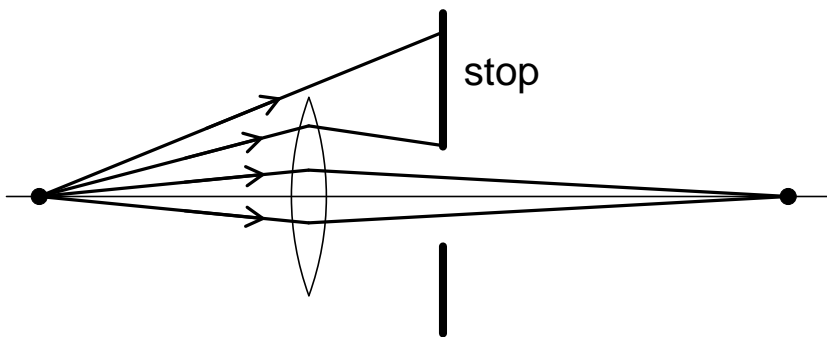
19

Stops

stop = aperture = hole

Formally:

stop = object that limits rays reaching image



Lens edge always a stop
often introduce additional ones

20

Stops important for two questions:

- How bright will image be?
= how much light is collected
- What is field of view?
= what area of object is imaged

Both important for real system design

Assume points close to optic axis

off-axis points: vignetting (Hecht pgs. 172-3)

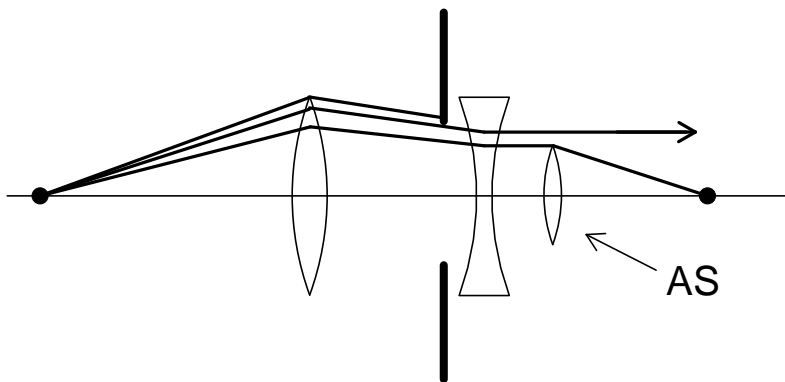
21

Image Brightness:

Generally many stops in system

Define *aperture stop* (\equiv AS)

= the limiting stop



In complicated system, trace rays to determine

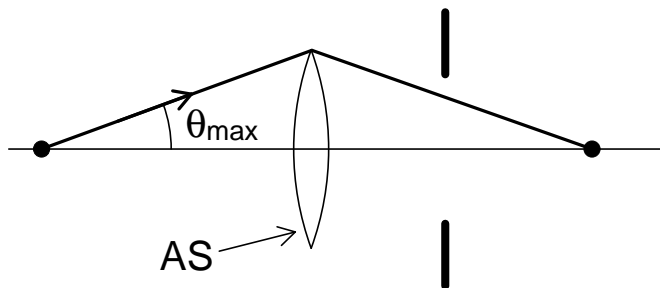
22

Aperture stop sets amount of light collected

Suppose AS = first element

then only rays hitting element are imaged

Defines acceptance angle θ_{\max}



23

Characterize source by *brightness* B

$$B = \frac{\text{power}}{(\text{source area})(\text{solid angle})}$$

units $\text{W}/(\text{m}^2 \text{ sr})$

Question: What's a steradian (sr)?

Typical light bulb:

$$P = 100 \text{ W}$$

$$\text{surface area} = 4\pi \times (3 \text{ cm})^2$$

radiates into $4\pi \text{ sr}$

$$\text{So } B \approx 700 \text{ W}/(\text{m}^2 \text{ sr})$$

24

System accepts solid angle $\pi\theta_{\max}^2$

Power into system = $B \times (\text{source area}) \times \pi\theta_{\max}^2$

Gives image intensity

What if first element \neq AS?

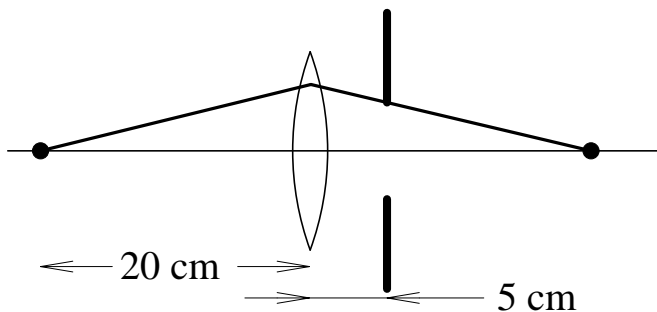
Define *entrance pupil*

= image of AS from object

System acts like first element is entrance pupil

25

Example:



Say $f = 10$ cm, stop radius = 0.5 cm

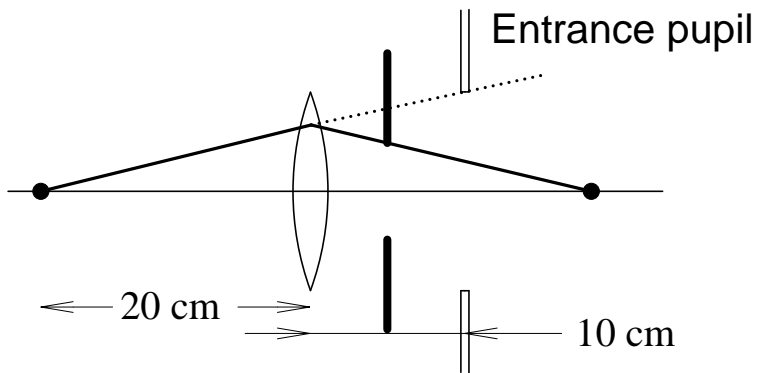
Find image of stop through lens:

$$s_o = 5 \text{ cm} \Rightarrow s_i = -10 \text{ cm}$$

Magnification $m = -s_i/s_o = 2$

26

So entrance pupil located 10 cm behind lens
radius = 1 cm



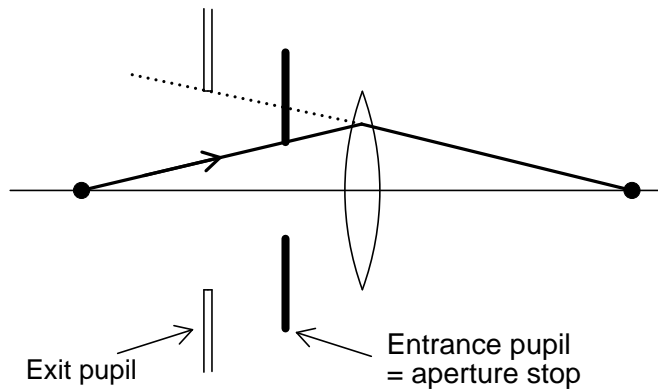
Defines rays accepted by system

here $\theta_{\max} = \tan^{-1}(1/30) \approx 0.033 \text{ rad}$

27

Similarly, define *exit pupil*

= image of AS seen from image of system



Exit pupil acts like “window”

all rays from object pass through window

28

Exit pupil important for systems viewed by eye
microscope, telescope, binoculars, etc.

Exit pupil like window

- if pupil small, far away:
observe small disk surrounded by darkness

See in cheap binoculars

- if pupil large, close to eye:
many rays don't enter eye ... wasted money

29

Ideal system: exit pupil aligned to pupil of eye

- 3-5 mm diameter
- located about 1 cm behind eyepiece

(Eyepiece = last element before eye
Distance eyepiece to exit pupil = eye relief)

Good binoculars:

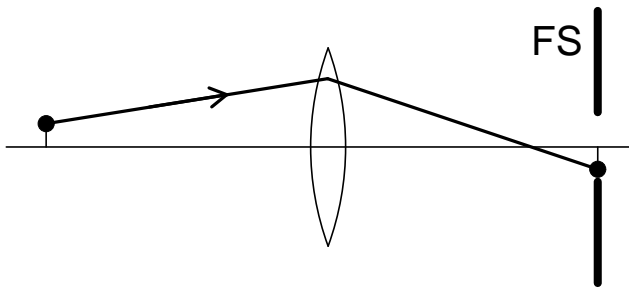
- image fills view
- comfortable to look through

Generally: when combining two systems, make
exit pupil of first = entrance pupil of second

30

Still have second question:
what is field of view?

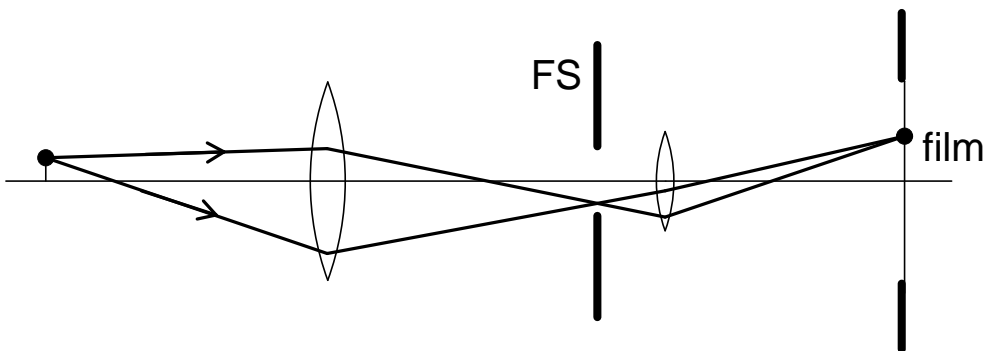
Define *field stop* (FS) =
stop that limits which object points are imaged



Often, field stop = edge of detector
(film, CCD sensor, retina of eye, etc.)

31

But not always:



Good field stop always in an image plane
(final or intermediate)

32

Field stops useful for non-imaging detectors
- photodiodes, PMT, bolometers
Use field stop to eliminate background light

Question: Photographers use a stop to set the exposure level of a camera. Does this refer to the field stop or the aperture stop?

Also, both AS and FS impact aberrations
(imaging errors)

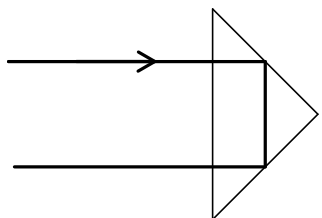
Idea: use stops to block non-paraxial rays

33

Last element: prisms
comment briefly

Two uses: reflection and dispersion

Reflecting: either TIR or mirror coatings
nice way to hold mirrors close together



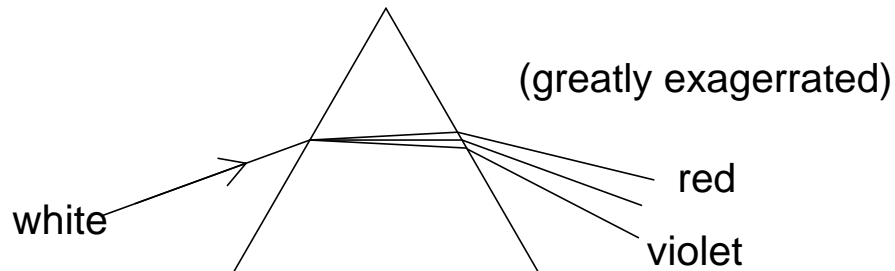
See Hecht 5.5.2 for more

34

Dispersing prisms: familiar rainbow effect

Use index $n = n(\omega)$

Snell's law $\Rightarrow \theta = \theta(\omega)$



Analysis straightforward (Hecht 5.5.1)

More often use diffraction gratings

35

Summary:

- Ray diagrams help analyze off-axis imaging
- Analyze multiple lenses in sequence
- Curved mirrors act much like lenses
- Stop = limiting edge
- Aperture stop sets brightness of image
- Field stop sets field of view

36